



scan QR code for more assessments


### Assessment # 6

Marks	World Around Us	English	Math	Urdu	Total

1. Match the transport.



2. Circle the technology devices.



World Around Us

1. Write letter Aa - Zz

Aa

Bb

Cc

Dd

Ee

Ff

Gg

Hh

Ii

Jj

Kk

Ll

Mm

Nn

Oo

Pp

Qq

Rr

Ss

Tt

Uu

Vv

Ww

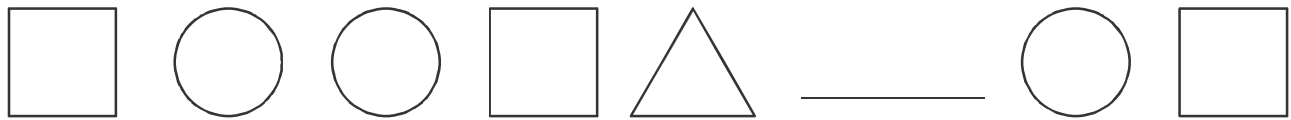

Xx

Yy

Zz

English

1. Complete the pattern.



2. Draw given shapes and colour by giving colour code.

Circle


red

Square

blue

Rectangle

orange



3. Zahra has 5 pencils. She given 1 to Ali How many pencils are left with Zahra.

$$5 - 1 =$$

۱۔ حروف کو ان کی چھوٹی شکل سے ملائیے۔

ق ک گ ل م ن

ز      ز      ؛      ۛ      ۛ      ۛ

۲۔ حروف تہجی لکھیے۔ 'ا تا ی'

This image shows a single sheet of white paper with horizontal ruling lines. The lines are evenly spaced and run across the width of the page. There are no margins, text, or other markings on the paper.

۳۔ 'شہرارتی نو' بتا ہے۔

Urdu