



Student Name: \_\_\_\_\_ Date: \_\_\_\_\_

Note: This assessment include the topics (greater than smaller than, Number 30-50, Addition, Subtraction, ordinal numbers, number names, shapes, time)

Total Marks: 50

Q1	Q2	Q3	Q4	Q5	Total Marks
/10	/10	/10	/10	/10	/50

Q1.(a) Write the correct symbol ( $<$ ,  $>$ ,  $=$ ). /5

49		50	37		27
21		12	17		17
		13		31	

(b). Write the missing numbers. /5

30		32	33	34	35		37	38	39	
	41	42	43		45	46	47	48	49	



Student Name: \_\_\_\_\_ Date: \_\_\_\_\_

Q2.(a) Write the name of given shapes.

/5



\_\_\_\_\_




\_\_\_\_\_



\_\_\_\_\_



\_\_\_\_\_



\_\_\_\_\_

(b). Solve the following sums.

/5

i) 
$$\begin{array}{r} 18 \\ - 3 \\ \hline \hline \end{array}$$

ii) 
$$\begin{array}{r} 15 \\ - 5 \\ \hline \hline \end{array}$$

iii) 
$$\begin{array}{r} 16 \\ - 4 \\ \hline \hline \end{array}$$

iv) 
$$\begin{array}{r} 20 \\ - 1 \\ \hline \hline \end{array}$$

v) 
$$\begin{array}{r} 9 \\ - 9 \\ \hline \hline \end{array}$$



Student Name: \_\_\_\_\_ Date: \_\_\_\_\_

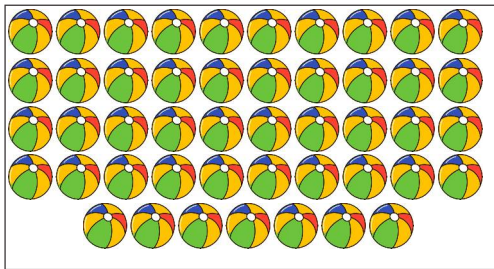
Q3. (a) Write the number names of the given numbers.


/5

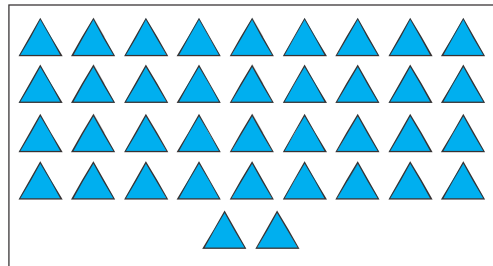
13	
12	
20	
19	
15	

(b). Count the objects and write the number in the box.


/5













scan QR code for more worksheets

Student Name: \_\_\_\_\_ Date: \_\_\_\_\_

Q4. (a) Look at the clock and write the correct time.

/4










(b). Solve the sums.

/6

i) 
$$\begin{array}{r} 3 \\ + 3 \\ \hline \end{array}$$

ii) 
$$\begin{array}{r} 8 \\ + 7 \\ \hline \end{array}$$

iii) 
$$\begin{array}{r} 12 \\ + 6 \\ \hline \end{array}$$

iv) 
$$\begin{array}{r} 19 \\ + 0 \\ \hline \end{array}$$

v) 
$$\begin{array}{r} 14 \\ + 6 \\ \hline \end{array}$$

vi) 
$$\begin{array}{r} 10 \\ + 8 \\ \hline \end{array}$$



Student Name: \_\_\_\_\_ Date: \_\_\_\_\_

Q5. (a) Write the names of the ordinal numbers.

/6

1 <sup>st</sup>	
2 <sup>nd</sup>	
3 <sup>rd</sup>	
10 <sup>th</sup>	
6 <sup>th</sup>	
8 <sup>th</sup>	

(b). Word Problem:

/2

Sara has 19 toys. On her birthday her mother gave her 4 more toys.  
How many toys she has altogether.

(c). Hassan has 14 pencils. His brother takeaway 4 pencils.

/2

How much does hassan have left ?