



Student Name: \_\_\_\_\_ Date: \_\_\_\_\_

Note: This assessment include the topics (subtraction, additions, even and odd numbers, money, symmetry, shapes, number 46-50)

Total Marks: 50

Q1	Q2	Q3	Q4	Q5	Total Marks
/10	/10	/10	/10	/10	/50

Q1.(a) Write the missing numbers. /5

	41		36	42		
	47		49			

(b). Colour the even number green and odd number blue. /5

44		27		38
50		41		



Student Name: \_\_\_\_\_ Date: \_\_\_\_\_

Q2.(a) Solve the sums

/6

$$\begin{array}{r} \text{i)} \quad 19 \\ - 3 \\ \hline \hline \end{array}$$

$$\begin{array}{r} \text{ii)} \quad 16 \\ - 4 \\ \hline \hline \end{array}$$

$$\begin{array}{r} \text{iii)} \quad 12 \\ - 2 \\ \hline \hline \end{array}$$

$$\begin{array}{r} \text{iv)} \quad 5 \\ - 2 \\ \hline \hline \end{array}$$

$$\begin{array}{r} \text{v)} \quad 18 \\ - 5 \\ \hline \hline \end{array}$$

$$\begin{array}{r} \text{vi)} \quad 7 \\ - 3 \\ \hline \hline \end{array}$$

(b). There are 14 apples on an apple tree 3 apples are fallen from tree.

How much left?

/4



Student Name: \_\_\_\_\_ Date: \_\_\_\_\_

Q3. (a) Count the coins and write the total amount in rupees.

/5



(b). Add the following:

/5

i) 
$$\begin{array}{r} 10 \\ + 5 \\ \hline \end{array}$$

ii) 
$$\begin{array}{r} 17 \\ + 2 \\ \hline \end{array}$$

iii) 
$$\begin{array}{r} 19 \\ + 1 \\ \hline \end{array}$$

iv) 
$$\begin{array}{r} 22 \\ + 2 \\ \hline \end{array}$$


v) 
$$\begin{array}{r} 6 \\ + 6 \\ \hline \end{array}$$



Student Name: \_\_\_\_\_ Date: \_\_\_\_\_






Q4. (a) Draw a line to divide the things in half evenly.

/5



(b). Write the names of given 3d shapes.

/5



Student Name: \_\_\_\_\_ Date: \_\_\_\_\_

Q5. (a) Look at the shapes and write their names.

/5



\_\_\_\_\_

\_\_\_\_\_

\_\_\_\_\_



\_\_\_\_\_

\_\_\_\_\_

(b). Circle the odd number from given number.

/5

39

10

50

38

20

42

13

9

24

11

23

8