



Student Name: _____ Date: _____

Note: This assessment include the topics (Number (36-45), Addition, time, pictograph, ordinal number, tens and ones, number name)

Total Marks = 50

Q1	Q2	Q3	Q4	Q5	Total Marks
/10	/10	/10	/10	/10	/50

Q1.(a) Write the correct tens and ones for the given number. /5

20	=	<input type="text"/>
45	=	<input type="text"/>
40	=	<input type="text"/>
37	=	<input type="text"/>
38	=	<input type="text"/>

(b). Fill in the blanks with ordinal number. /5

fish, elephant, frog, duck, ant


- The elephant is in _____ place.
- The duck is in _____ place.
- The ant is in _____ place.
- The fish is in _____ place.
- The frog is in _____ place.



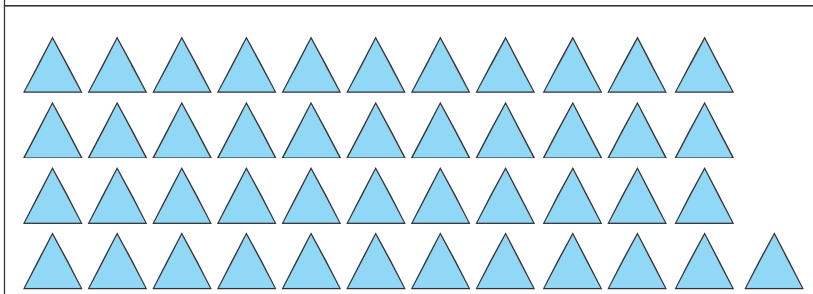
Student Name: _____ Date: _____

Q2. (a) Count and match with correct number.

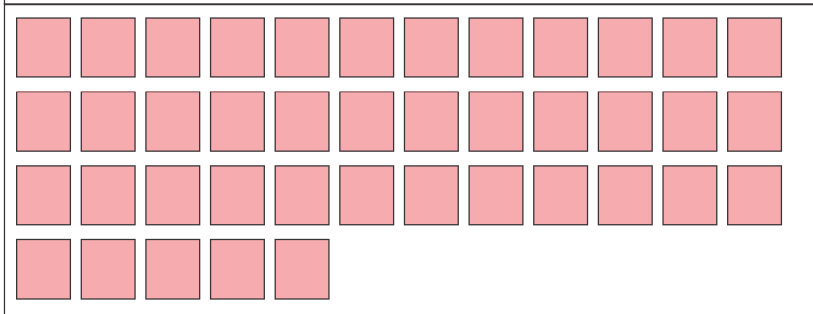
/5



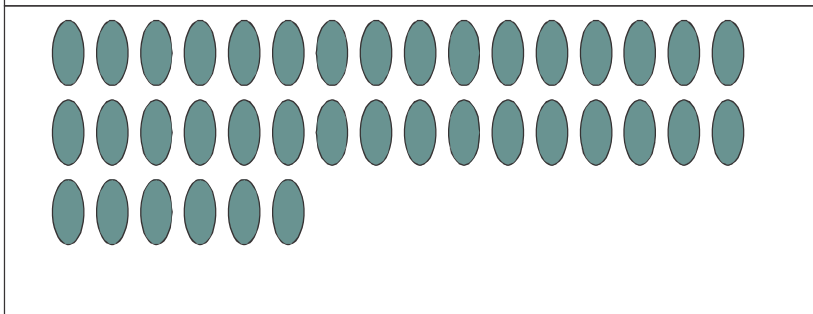
41



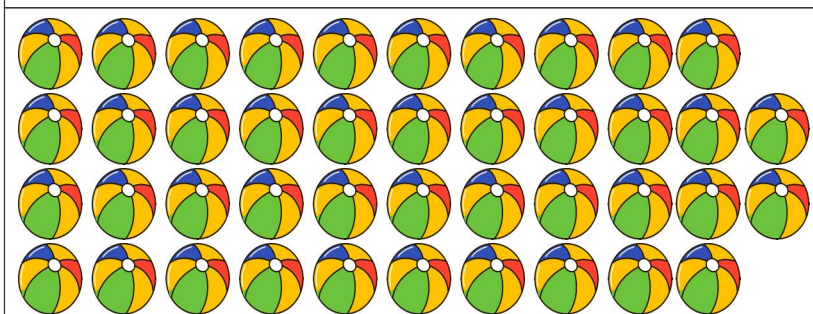
38



42



37



45




Student Name: _____ Date: _____

(b). Write the correct time for each clock in the given box

/5












Q3.(a) Count and write the answers in the given boxes.


/4



+



=



+



=



Student Name: _____ Date: _____

(b). Write the number names of the given numbers:

/6

19

11

15

18

20

12

Q4. (a) Add the following:

/6

i)
$$\begin{array}{r} 17 \\ + 5 \\ \hline \end{array}$$

ii)
$$\begin{array}{r} 9 \\ + 9 \\ \hline \end{array}$$

iii)
$$\begin{array}{r} 15 \\ + 5 \\ \hline \end{array}$$

iv) $17 + 2 = \square$ v) $5 + 6 = \square$ vi) $3 + 0 = \square$



Student Name: _____ Date: _____

(b). Sana has 4 candies and 8 chocolates.

/4

How much she has altogether?


$$\boxed{} + \boxed{} = \boxed{}$$

I have 12 coloured pencils and 7 crayons. How much colours I have altogether.

$$\begin{array}{r} \boxed{} \\ + \quad \boxed{} \\ \hline \hline \end{array}$$

Q5. (a) Look at the pictograph and answer the following question.

/8





Student Name: _____ Date: _____

1. How many Pizzas are there in the bakery?

2. How many more cupcakes than the sandwiches?

3. How many burgers are there in the bakery?

4. How many total items in the bakery?

(b). Make the hands and tell the time what is your school timings. /2

