





Student Name: \_\_\_\_\_ Date: \_\_\_\_\_

Match the shapes with their names.





Student Name: \_\_\_\_\_ Date: \_\_\_\_\_

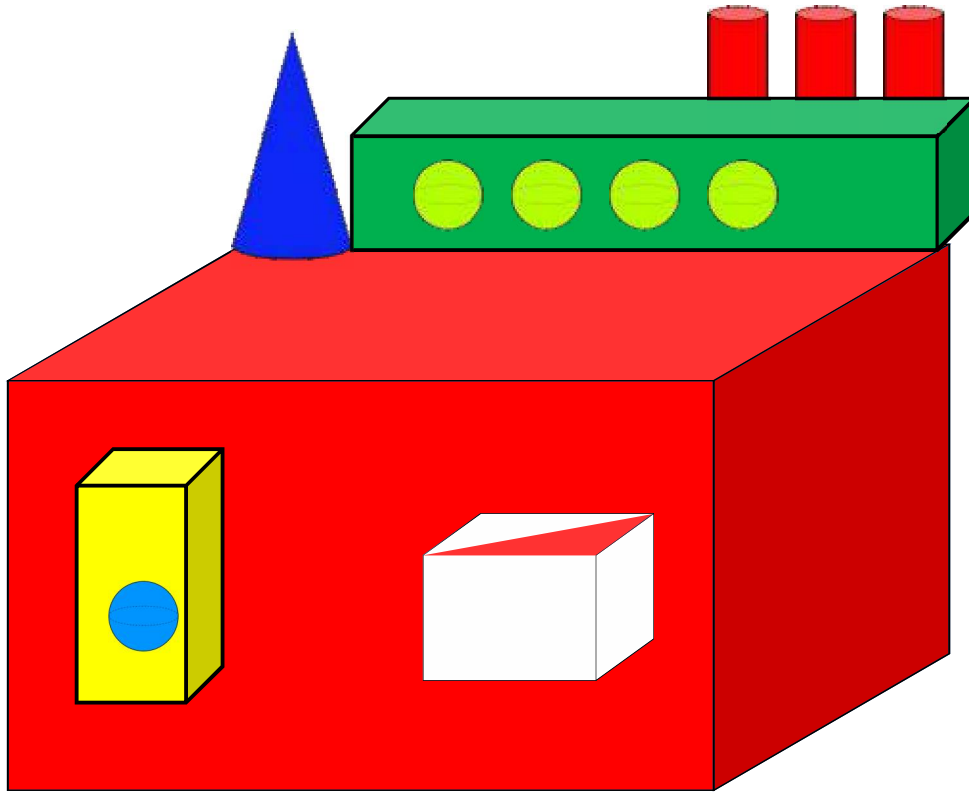
Match the objects with the same shape.





Student Name: \_\_\_\_\_ Date: \_\_\_\_\_

Look at the house and answer the following questions.



1. How many cones:
2. How many cubes:
3. How many spheres:
4. How many cuboid:
5. How many cylinders:





Student Name: \_\_\_\_\_ Date: \_\_\_\_\_

Identify the solid shapes and write the missing letters.



s \_ \_ h \_ \_ \_ e



\_ \_ u \_ \_ e



c \_ \_ \_ e



c \_ \_ b \_ \_ \_ d



c \_ \_ l \_ \_ n \_ \_ e \_