




Student Name: \_\_\_\_\_ Date: \_\_\_\_\_

Count and subtract the objects. Write the correct number in the box.



$$\boxed{4} - \boxed{4} = \boxed{\phantom{0}}$$



$$\boxed{7} - \boxed{5} = \boxed{\phantom{0}}$$



$$\boxed{9} - \boxed{8} = \boxed{\phantom{0}}$$



$$\boxed{6} - \boxed{3} = \boxed{\phantom{0}}$$





$$\boxed{8} - \boxed{1} = \boxed{\phantom{0}}$$





Student Name: \_\_\_\_\_ Date: \_\_\_\_\_


Count and subtract the objects. Write the correct number in the given box.




$$\boxed{14} - \boxed{4} = \boxed{\phantom{00}}$$


$$\boxed{20} - \boxed{4} = \boxed{\phantom{00}}$$


$$\boxed{18} - \boxed{6} = \boxed{\phantom{00}}$$


$$\boxed{16} - \boxed{5} = \boxed{\phantom{00}}$$


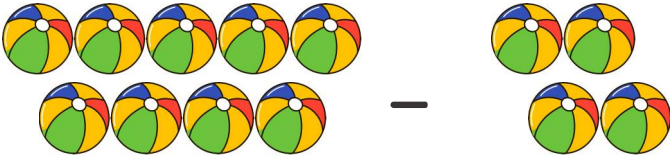
$$\boxed{12} - \boxed{3} = \boxed{\phantom{00}}$$


$$\boxed{19} - \boxed{2} = \boxed{\phantom{00}}$$




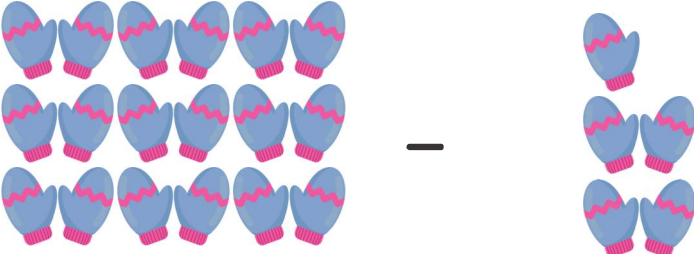
Student Name: \_\_\_\_\_ Date: \_\_\_\_\_

Use the pictures to solve the problem.



$$10 - 4 = \square$$


$$15 - 10 = \square$$


$$18 - 6 = \square$$


$$15 - 4 = \square$$

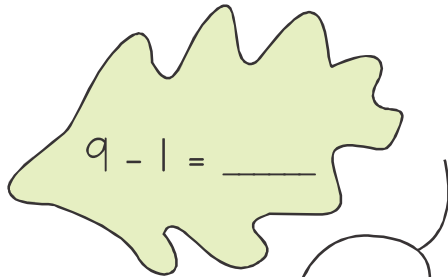

$$10 - 4 = \square$$



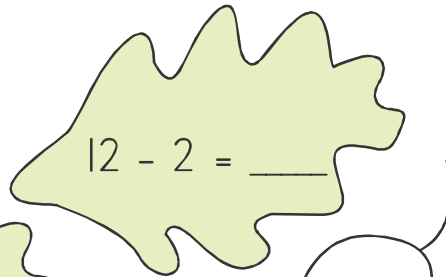
Student Name: \_\_\_\_\_ Date: \_\_\_\_\_

Subtract the number and write how many left by using number line.

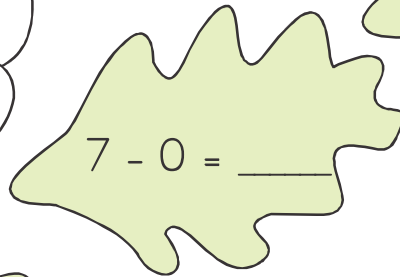




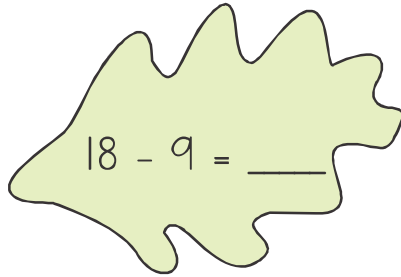
$9 - 1 = \underline{\quad}$



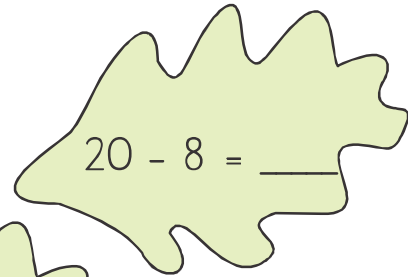
$12 - 2 = \underline{\quad}$



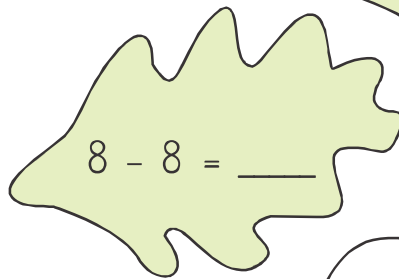
$7 - 0 = \underline{\quad}$



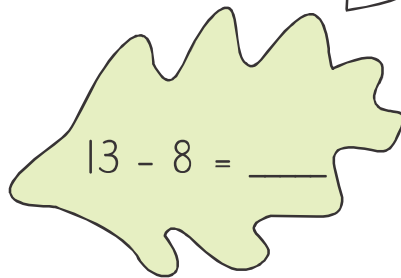
$18 - 9 = \underline{\quad}$



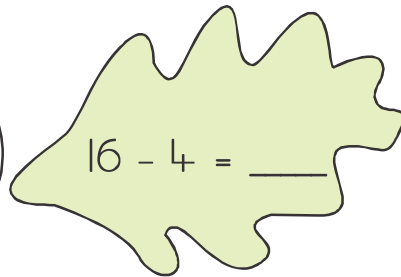
$20 - 8 = \underline{\quad}$



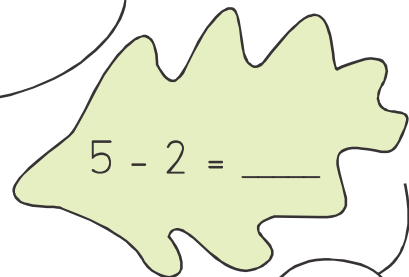
$8 - 8 = \underline{\quad}$



$13 - 8 = \underline{\quad}$



$16 - 4 = \underline{\quad}$



$5 - 2 = \underline{\quad}$



Student Name: \_\_\_\_\_ Date: \_\_\_\_\_

Subtract the number and write how many left by using number line.



$$\begin{array}{r} 7 \\ - 3 \\ \hline \\ \hline \end{array}$$

$$\begin{array}{r} 1 \\ - 1 \\ \hline \\ \hline \end{array}$$

$$\begin{array}{r} 9 \\ - 0 \\ \hline \\ \hline \end{array}$$

$$\begin{array}{r} 14 \\ - 4 \\ \hline \\ \hline \end{array}$$

$$\begin{array}{r} 19 \\ - 3 \\ \hline \\ \hline \end{array}$$

$$\begin{array}{r} 12 \\ - 1 \\ \hline \\ \hline \end{array}$$

$$\begin{array}{r} 18 \\ - 5 \\ \hline \\ \hline \end{array}$$

$$\begin{array}{r} 16 \\ - 4 \\ \hline \\ \hline \end{array}$$

$$\begin{array}{r} 20 \\ - 9 \\ \hline \\ \hline \end{array}$$





Student Name: \_\_\_\_\_ Date: \_\_\_\_\_


Sara has 10 stars. She gave 3 stars to her friend.  
How many stars are left with Sara?

$$\square - \square = \square$$



I had 17 cookies. My sister ate 6 cookies. How many cookies do I have left?

$$\square - \square = \square$$




There are 16 apples on the tree. Ali pluck 5 apples.  
How many apples left on the tree.

$$\square - \square = \square$$



There are 18 goats in a farm. The farmer sold 5 goats. How many goats are left in the farm?

$$\square - \square = \square$$



Ali has 12 balloons. 5 balloon popped. How many balloons do Ali have now?

$$\square - \square = \square$$

