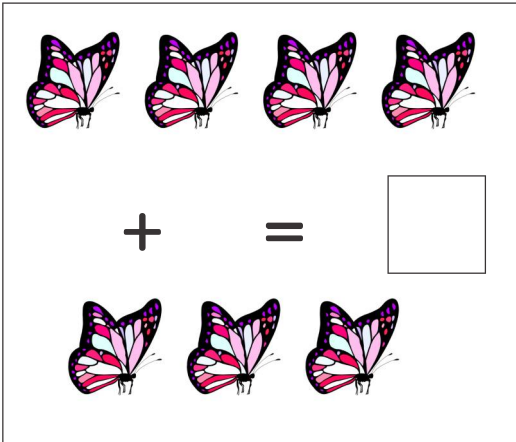


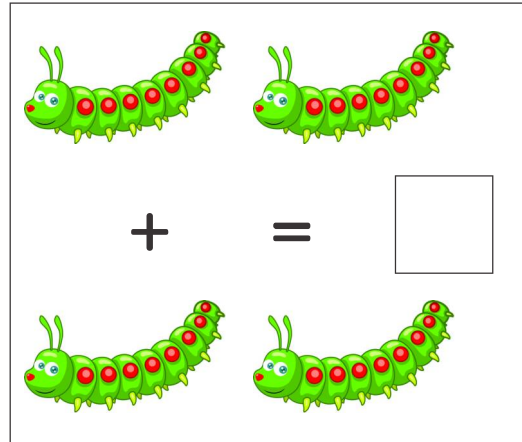


Student Name: _____ Date: _____

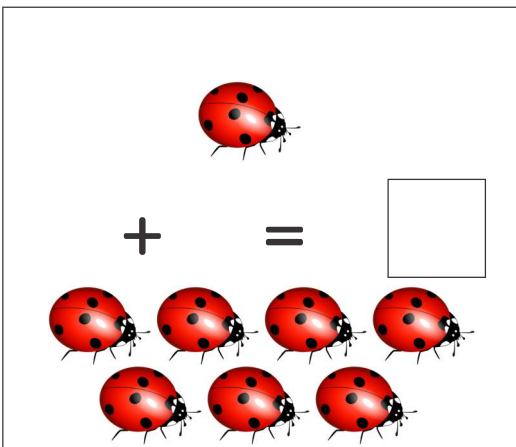
Count the objects and combine the groups to find the answer.




4 butterflies + 3 butterflies =



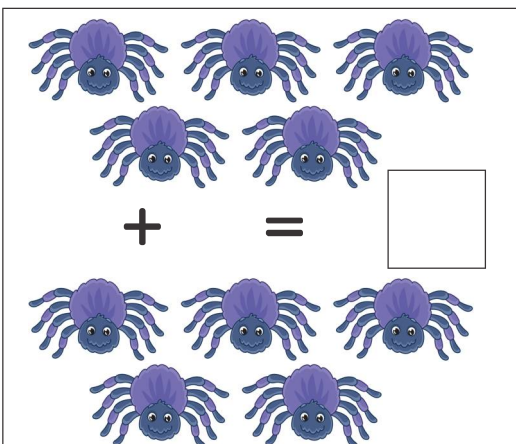
2 caterpillars + 2 caterpillars =




1 ladybug + 7 ladybugs =



5 bees + 3 bees =



5 spiders + 4 spiders =



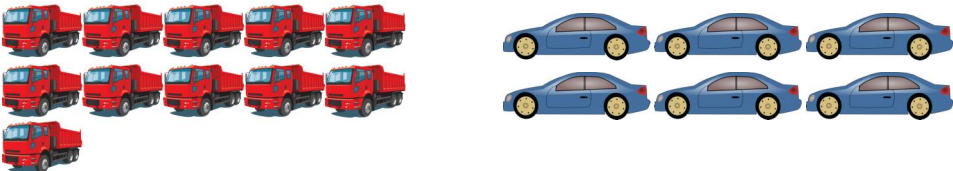




6 birds + 3 birds =



Student Name: _____ Date: _____

Add the objects together and write the answer the given box.


$$12 + 6 = \square$$

$$13 + 2 = \square$$

$$11 + 6 = \square$$

$$6 + 6 = \square$$

$$10 + 4 = \square$$



Student Name: _____ Date: _____

Count the objects write the numbers and find the answer.



+




=




+




=




+




=



+



=



+



=



Student Name: _____ Date: _____

Add the numbers and write how many are there:

$$\begin{array}{r} 6 \\ + 2 \\ \hline \\ \hline \end{array}$$

$$\begin{array}{r} 7 \\ + 3 \\ \hline \\ \hline \end{array}$$

$$\begin{array}{r} 2 \\ + 1 \\ \hline \\ \hline \end{array}$$

$$\begin{array}{r} 10 \\ + 4 \\ \hline \\ \hline \end{array}$$

$$\begin{array}{r} 13 \\ + 5 \\ \hline \\ \hline \end{array}$$

$$\begin{array}{r} 9 \\ + 9 \\ \hline \\ \hline \end{array}$$

$$\begin{array}{r} 14 \\ + 5 \\ \hline \\ \hline \end{array}$$

$$\begin{array}{r} 7 \\ + 7 \\ \hline \\ \hline \end{array}$$

$$\begin{array}{r} 11 \\ + 9 \\ \hline \\ \hline \end{array}$$

$$\begin{array}{r} 12 \\ + 2 \\ \hline \\ \hline \end{array}$$

$$\begin{array}{r} 15 \\ + 5 \\ \hline \\ \hline \end{array}$$

$$\begin{array}{r} 16 \\ + 2 \\ \hline \\ \hline \end{array}$$



Student Name: _____ Date: _____

Use the number line to find the answers.



$5 + 6 = \underline{\hspace{2cm}}$

$13 + 1 = \underline{\hspace{2cm}}$

$2 + 0 = \underline{\hspace{2cm}}$

$18 + 2 = \underline{\hspace{2cm}}$

$14 + 3 = \underline{\hspace{2cm}}$

$15 + 4 = \underline{\hspace{2cm}}$

$10 + 5 = \underline{\hspace{2cm}}$

$17 + 2 = \underline{\hspace{2cm}}$

$11 + 6 = \underline{\hspace{2cm}}$

$7 + 8 = \underline{\hspace{2cm}}$



Student Name: _____ Date: _____

Aysha has 5 sharpners. Her mother gave her 6 more sharpners.
How many sharpners does she have?

$$\square + \square = \square$$



There are 14 boys and 6 girls in the school bus. How many total
students are in the bus?

$$\square + \square = \square$$



There are 12 bananas and 7 guavas in the fruit basket.
How many bananas and guavas are in total.

$$\square + \square = \square$$



There are 15 fish and 5 frog in the pond?
How many total are there?

$$\square + \square = \square$$

