



Student Name: _____ Date: _____

Ali recorded the number of cakes sold over a week. Read the chart and answer the questions.

Day	Number of Cakes Sold
Monday	
Tuesday	
Wednesday	
Thursday	
Friday	
Saturday	
Sunday	


- How many cakes did he sell on Thursday?
- Which day did he sell the least cakes?
- Which day did he sell most cakes?
- How many cakes did he sell on Monday and Wednesday?
- How many cakes did he sell in whole week?







scan QR code for more worksheets

Student Name: _____ Date: _____

Teacher Sana asked her students which fruit they liked the most. Use the information to complete the table and answer the following questions.



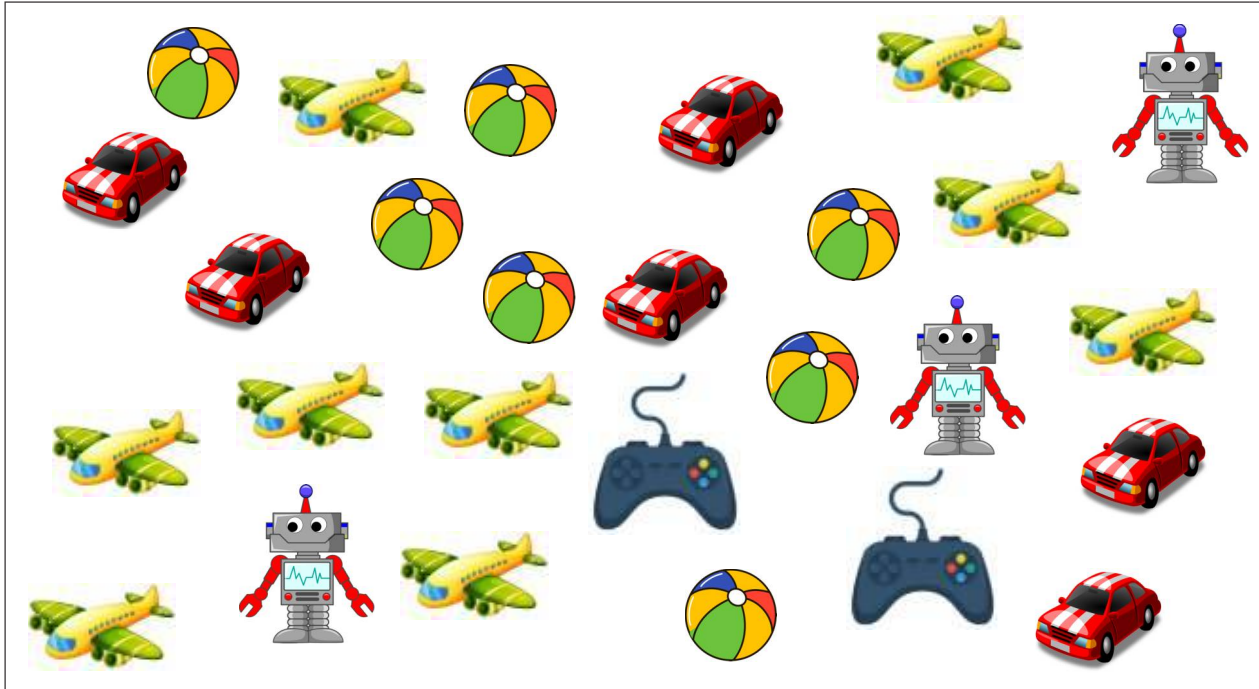
- How many students liked the bananas?
- How many students liked the guava?
- How many students liked the mangoes?
- Which fruit student like the most?
- How many students liked the apples?




scan QR code for more worksheets

Student Name: _____ Date: _____

Ayan has lot of toys. Help him to sort and count the toys.



1. Which toy he has more in number.
2. How many Robots he have?
3. How many more balls are there than cars?
4. How many video games are there?
5. How many toys total he have?







scan QR code for more worksheets

Student Name: _____ Date: _____

In a garden there are so many flowers of different colours. Make a pictograph and sort the flowers according to colours. Complete the table and answer the following questions.



- How many yellow flowers are in the garden?
- Which flower are more in the garden?
- How many more yellow flower tan the red flower?
- How many flowers are total in the garden?
