



Student Name: _____ Date: _____

This assessment include the numbers (1-25), Shapes, Money.

Marks Division: Oral counting + Number Identification (1-50): 5 marks

Written: 45 marks

Oral Counting	Q1	Q2	Q3	Q4	Q5	Q6	Q7	Q8	Total
/5	/10	/5	/5	/5	/5	/5	/5	/5	/50

Q1. Write the counting 1 - 25.

/10

T	O

T	O

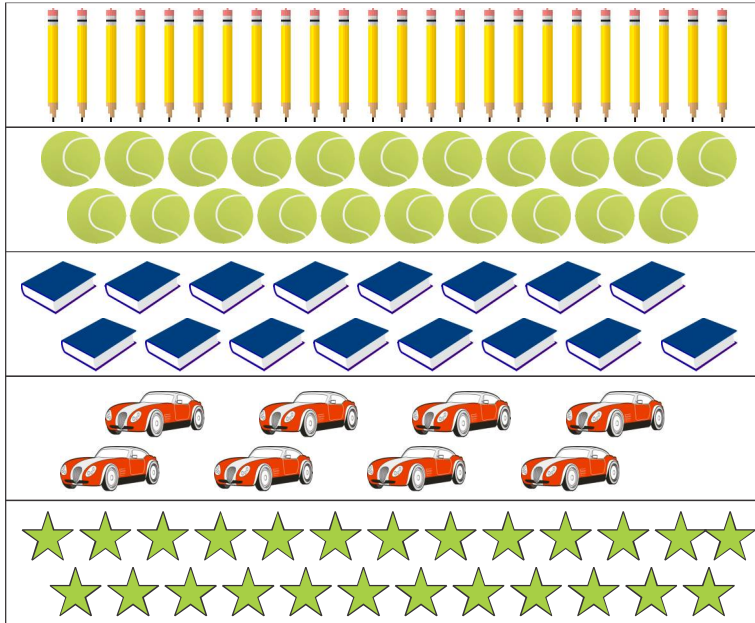
T	O



scan QR code for more worksheets

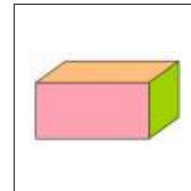
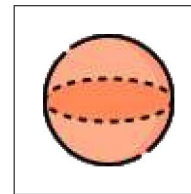
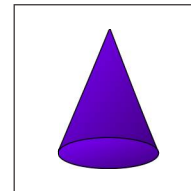

Q2. Count the objects and write the numbers.

/5



Q3. Match the objects with its shapes.

/5





Q4. Write the missing number.

/5

1	2		4		6
	8		10		12
13		15		17	18
18		20		22	23
			25		

Q5. Match the money with its value:

/5



100 Rs.



50 Rs.



500 Rs.



10 Rs.



20 Rs.



Q6. Count the coins and write the total amount in rupees. /5



= _____ Rs.



= _____ Rs.



= _____ Rs.


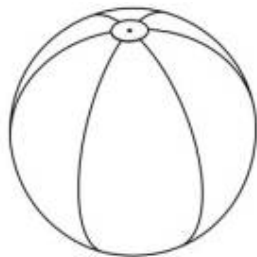
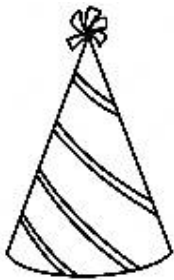


= _____ Rs.

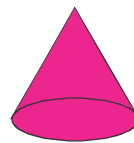


= _____ Rs.

Q7. Colour the objects according to key. /5



blue



pink

Q8. What comes before and after. /5

