





Student Name: \_\_\_\_\_ Date: \_\_\_\_\_


Count and subtract the vegetables. Write the correct number in the box.




$$5 - 2 =$$



$$7 - 3 =$$



$$8 - 5 =$$



$$4 - 4 =$$



Student Name: \_\_\_\_\_ Date: \_\_\_\_\_


Subtract the given number by crossing out the objects.



$$7 - 2 =$$



$$5 - 1 =$$



$$8 - 3 =$$



$$9 - 4 =$$





$$4 - 2 =$$

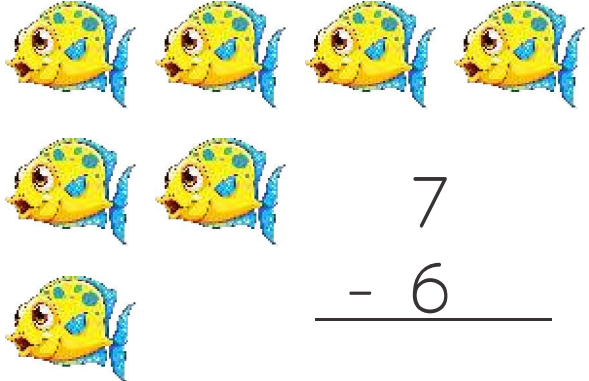



Student Name: \_\_\_\_\_ Date: \_\_\_\_\_




$$\begin{array}{r} 9 \\ - 5 \\ \hline \\ \hline \end{array}$$


$$\begin{array}{r} 6 \\ - 3 \\ \hline \\ \hline \end{array}$$


$$\begin{array}{r} 3 \\ - 1 \\ \hline \\ \hline \end{array}$$


$$\begin{array}{r} 7 \\ - 6 \\ \hline \\ \hline \end{array}$$


$$\begin{array}{r} 2 \\ - 2 \\ \hline \\ \hline \end{array}$$


$$\begin{array}{r} 5 \\ - 3 \\ \hline \\ \hline \end{array}$$




Student Name: \_\_\_\_\_ Date: \_\_\_\_\_

Read the word problem and write the answer in the box:


I have 2 pencils my friend takeaway 1

$$2 - 1 = \square$$




There are 6 bananas takeaway 2

$$6 - 2 = \square$$



My friend has 7 toffees I takeaway 3

$$7 - 3 = \square$$



There are 4 ice-cream takeaway 4


$$4 - 4 = \square$$






Student Name: \_\_\_\_\_ Date: \_\_\_\_\_

- 1) There are 9 flowers in the garden. Sara plucked 4 flowers.  
How many flowers left.



$$9 - 4 =$$

- 2) There are 5 frogs near the pond. 3 jumped into the water.  
How many left.



$$5 - 3 =$$

- 3) I have 3 cupcakes. I gave 1 to my friend. How many left.



$$2 - 1 =$$