




Student Name: _____ Date: _____




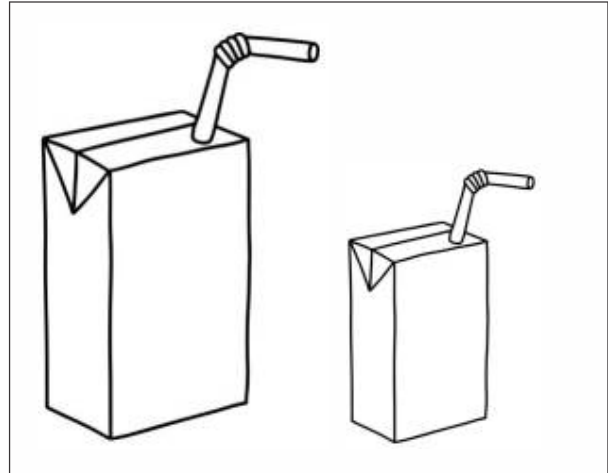

Circle the object that hold more water.





Student Name: _____ Date: _____

Colour the objects that can hold less.





Student Name: _____ Date: _____

Draw a line to match sets of more or less with their boxes.



The image shows a matching exercise. At the top, there are four bags of chips arranged in two rows of two. Each bag is yellow with a red top and the word 'chips' in white on a red banner. The top-left pair has two bags, each with 2 yellow chips. The top-right pair has two bags, each with 3 yellow chips. The bottom-left pair has two bags, each with 4 yellow chips. The bottom-right pair has two bags, each with 5 yellow chips. Below the bags are two cardboard boxes. The box on the left is large, and the box on the right is small. The task is to draw a line connecting the bags to the boxes based on their capacity.



Student Name: _____ Date: _____

Tick (✓) the things that hold more and cross (X) the things that hold less.



