




Student Name: _____ Date: _____

Number each set of three objects from 1, 2, 3. 1 being shortest and 3 being the longest.





Student Name: _____ Date: _____

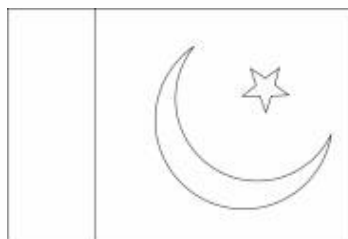
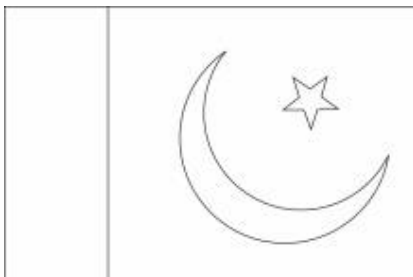

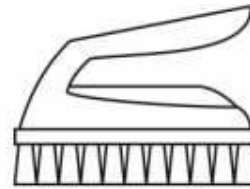

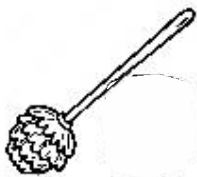



Number each set of three items from 1, 2, 3. 1 being the longest and 3 being the shortest.





Student Name: _____ Date: _____

Colour the things which are longest.





Student Name: _____ Date: _____

Tick (✓) the long one and cross (X) out the short one in each section:

